


Telling Time Worksheets

Practice telling time worksheets with analog clocks


Draw the *hour hand* on each of the clock to show the time indicated. First one is done as an example, your job is to finish off the rest.

(2nd grade math)


3 : 15




1 : 15




8 : 15



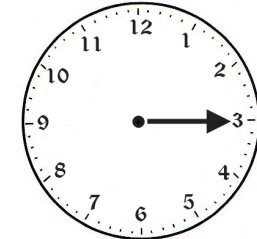
5 : 15




6 : 15



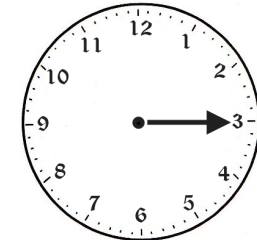
9 : 15




12 : 15




4 : 15




7 : 15



10 : 15



2 : 15



11 : 15

