


# Telling Time Worksheets

## Practice telling time worksheets with analog clocks


Draw the *hour hand* on each of the clock to show the time indicated. First one is done as an example, your job is to finish off the rest.

*(2nd grade math)*


9 : 30




1 : 30




6 : 30




11 : 30




3 : 30




8 : 30




12 : 30




4 : 30




7 : 30



10 : 30



2 : 30



5 : 30

