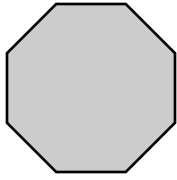


## Geometric shapes multiple choice worksheet

Pick the right name for each given geometric shape from four choices. First one is done as an example.


1)

- A. Square
- B. Cube
- C. Octagon
- D. Triangle



2)

- A. Circle
- B. Triangle
- C. Rectangle
- D. Square



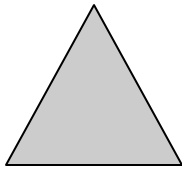
3)

- A. Square
- B. Cube
- C. Parallelogram
- D. Triangle



4)

- A. Square
- B. Cube
- C. Octagon
- D. Triangle



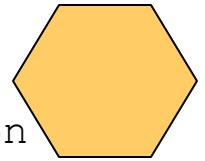
5)

- A. Square
- B. Heart
- C. Octagon
- D. Triangle



6)

- A. Square
- B. Pentagon
- C. Octagon
- D. Hexagon



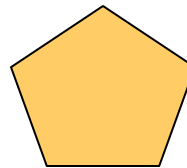
7)

- A. Diamond
- B. Cube
- C. Octagon
- D. Triangle



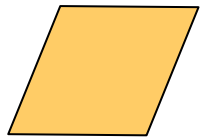
8)

- A. Square
- B. Cube
- C. Pentagon
- D. Triangle



9)

- A. Circle
- B. Rhombus
- C. Octagon
- D. Cylinder



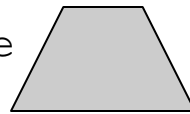
10)

- A. Square
- B. Circle
- C. Pentagon
- D. Rectangle



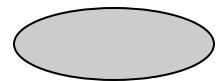
11)

- A. Triangle
- B. Square
- C. Rhombus
- D. Trapezoid



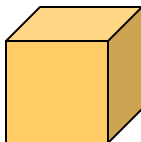
12)

- A. Circle
- B. Oval
- C. Ring
- D. Square



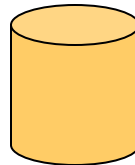
13)

- A. Square
- B. Cube
- C. Octagon
- D. Triangle



14)

- A. Circle
- B. Cone
- C. Cylinder
- D. Cube



15)

- A. Square
- B. Oval
- C. Triangle
- D. Cone

