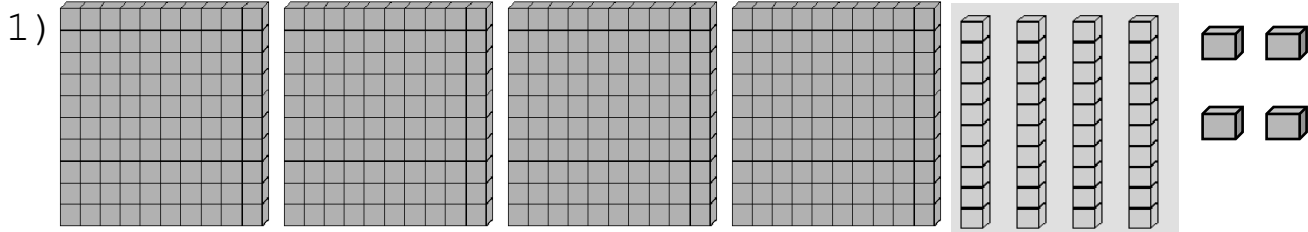


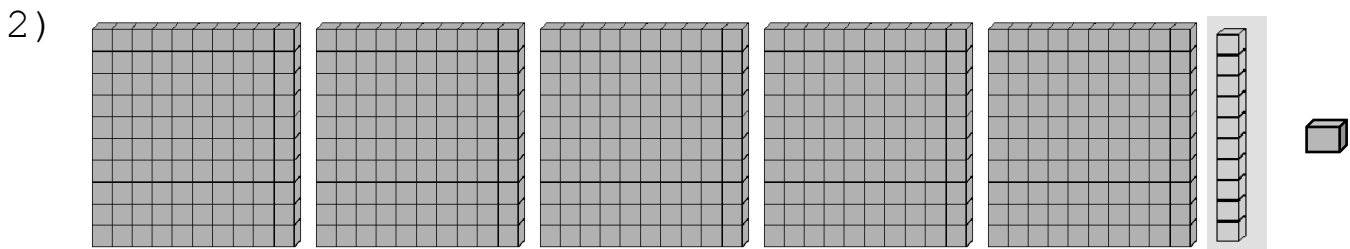
Place Value To Hundreds Worksheet –3

Place value worksheets

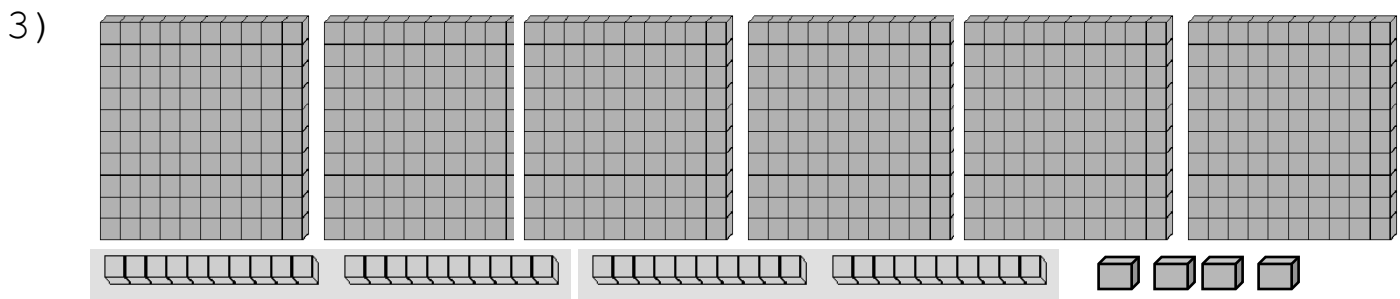
Problem: Given below are the shapes (ones, tens and hundreds); fill in the blanks in the place value chart using your place value to hundreds skills.



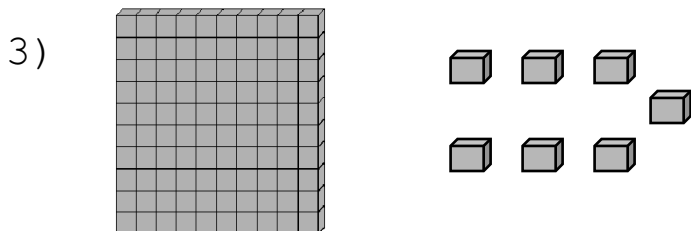
<i>Hundreds</i>	<i>Tens</i>	<i>Ones</i>	<i>Number</i>	<i>Number in expanded form</i>	<i>Number in words</i>
4	4	4	444	$400 + 40 + 4$	Four Hundred Forty Four



<i>Hundreds</i>	<i>Tens</i>	<i>Ones</i>	<i>Number</i>	<i>Number in expanded form</i>	<i>Number in words</i>



<i>Hundreds</i>	<i>Tens</i>	<i>Ones</i>	<i>Number</i>	<i>Number in expanded form</i>	<i>Number in words</i>



<i>Hundreds</i>	<i>Tens</i>	<i>Ones</i>	<i>Number</i>	<i>Number in expanded form</i>	<i>Number in words</i>