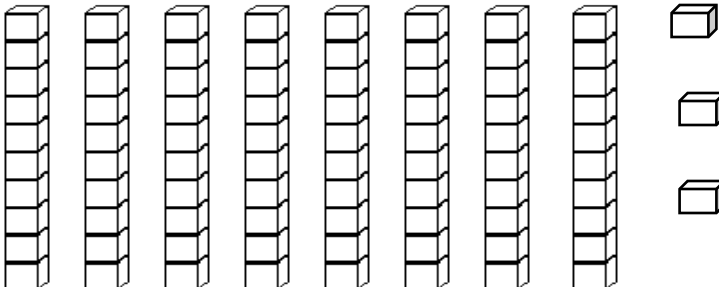


Place Value To Tens Worksheet - 4

Place value worksheets

Problem 1: Use your skills of place value to tens, to complete the place value charts for the following problems:

a)

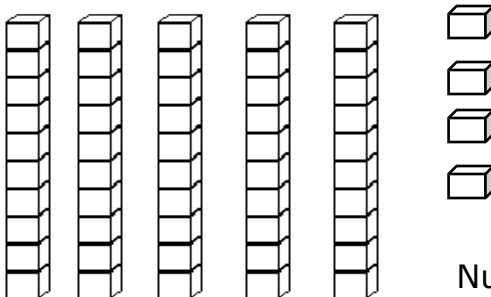


8 tens rods and 3 ones units are shown. To the right is a place value chart with columns for Tens, Ones, and Number.

Tens	Ones	Number

Number in words = _____

b)

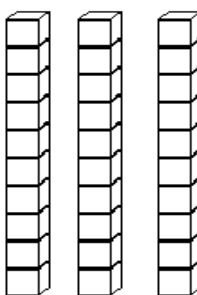


5 tens rods and 4 ones units are shown. To the right is a place value chart with columns for Tens, Ones, and Number.

Tens	Ones	Number

Number in words = _____

c)

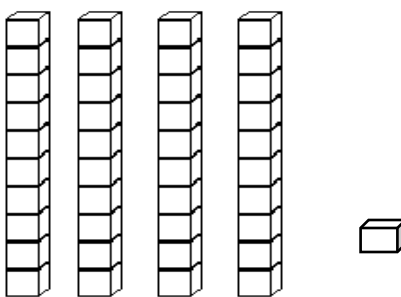


3 tens rods are shown. To the right is a place value chart with columns for Tens, Ones, and Number.

Tens	Ones	Number

Number in words = _____

d)



4 tens rods and 1 one unit are shown. To the right is a place value chart with columns for Tens, Ones, and Number.

Tens	Ones	Number

Number in words = _____