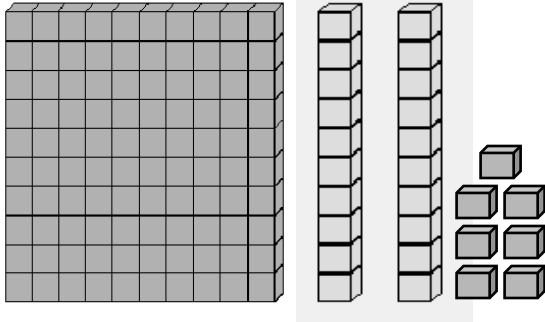


# Place Value To Hundreds Worksheet -1

## Place value worksheets

**Problem:** Given below are the shapes (ones, tens and hundreds); fill in the blanks in the place value chart using your place value to hundreds skills.

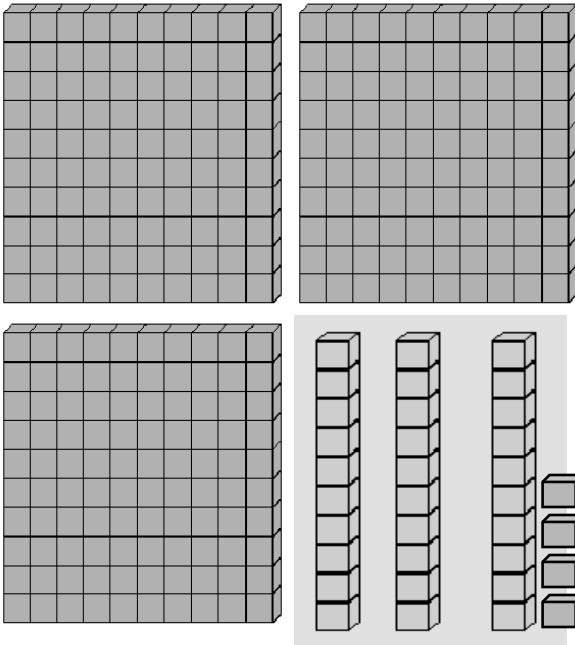
1)



<i>Hundreds</i>	<i>Tens</i>	<i>Ones</i>	<i>Number</i>	<i>Number in expanded form</i>
<b>1</b>	<b>2</b>	<b>7</b>	<b>127</b>	<b>100 + 20 + 7</b>

Number in words = One Hundred Twenty Seven

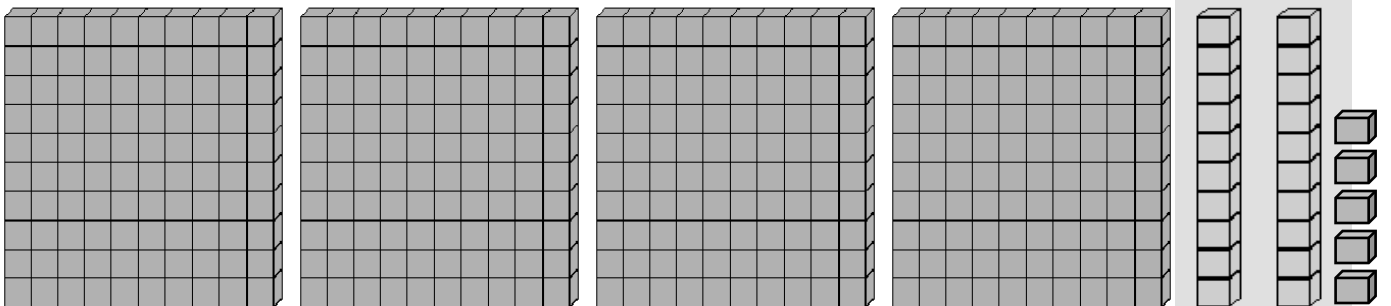
2)



<i>Hundreds</i>	<i>Tens</i>	<i>Ones</i>	<i>Number</i>	<i>Number in expanded form</i>

Number in words = \_\_\_\_\_

3)



<i>Hundreds</i>	<i>Tens</i>	<i>Ones</i>	<i>Number</i>	<i>Number in expanded form</i>	<i>Number in words</i>